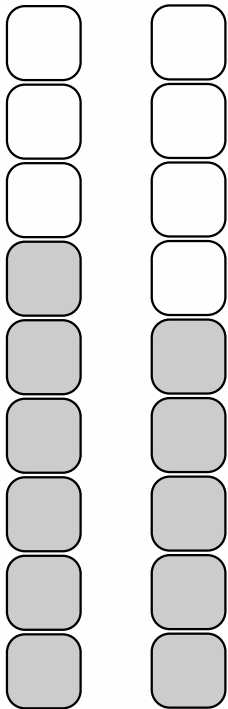


# ZNAK WIĘKSZOŚCI, MNIEJSZOŚCI I RÓWNOŚCI

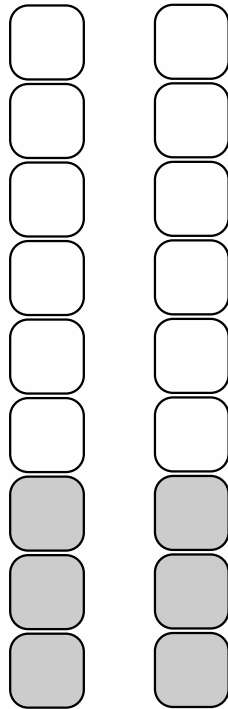
- odp. do zad. 7 -

Pokoloruj odpowiednią ilość kwadratów i wstaw znak  $>$ ,  $=$ ,  $<$ .



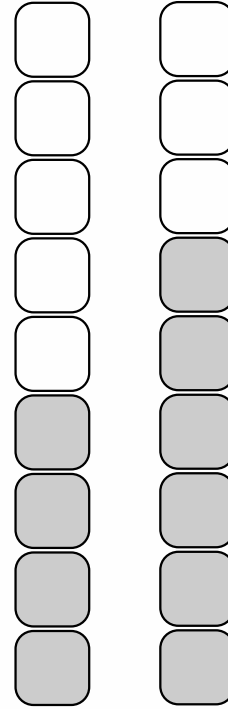
$$6 > 5$$

$>$    $=$    $<$



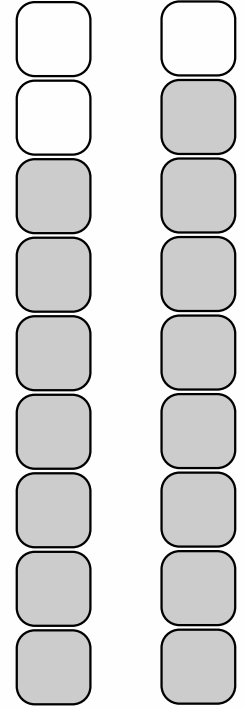
$$3 = 3$$

$>$    $=$    $<$



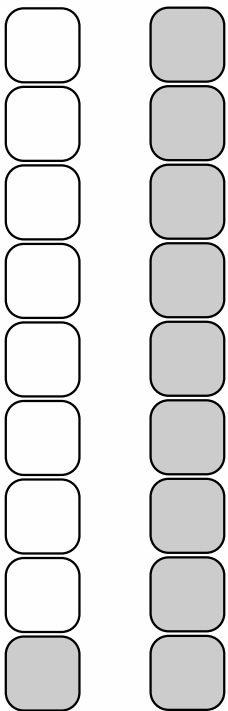
$$4 < 6$$

$>$    $=$    $<$



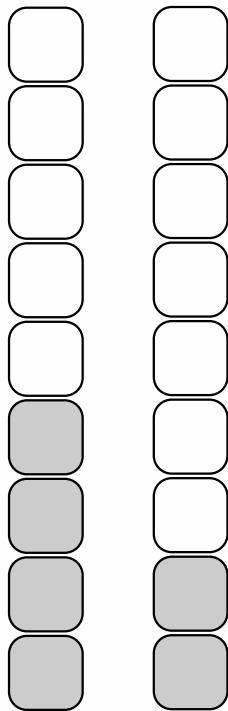
$$7 < 8$$

$>$    $=$    $<$



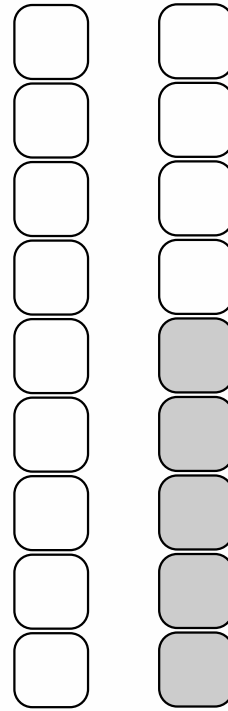
$$1 < 9$$

$>$    $=$    $<$



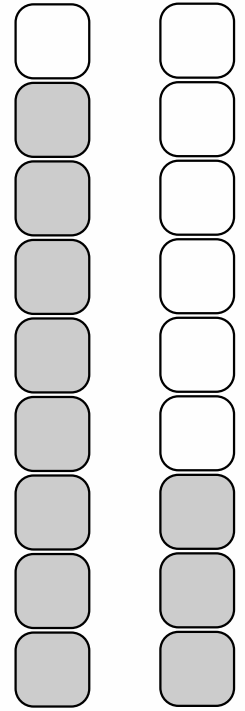
$$4 > 2$$

$>$    $=$    $<$



$$0 < 5$$

$>$    $=$    $<$



$$8 > 3$$

$>$    $=$    $<$