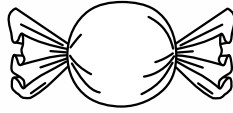
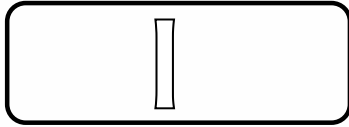



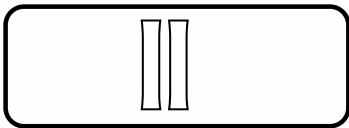
CYFRY RZYMSKIE - odpowiedzi -

Obok cyfry arabskiej w prostokącie napisz poprawną cyfrę rzymską.
Obok prostokąta przy 1 narysuj cukierka, przy 2 - dwie chmurki,
przy 3 - trzy kwadraty, przy 4 - cztery serca, przy 5 - pięć balonów,
przy 6 - sześć śnieżynek, przy 7 - siedem trójkątów, przy 8 - osiem lizaków,
przy 9 - dziewięć kótek, przy 10 - dziesięć kresek.


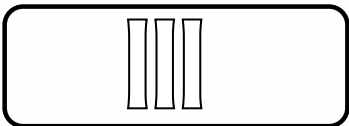
1




2





3



4



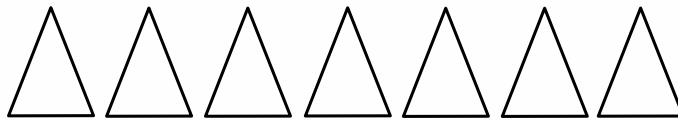
5




6




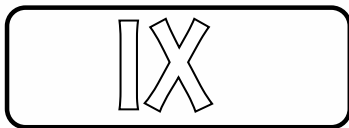
7



8



9



10

